



Numbers

worksheetspack

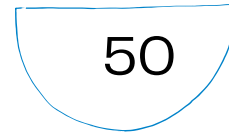


Grade 2 Math

Name:

Date:

Comparing numbers

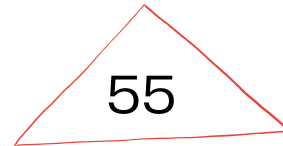
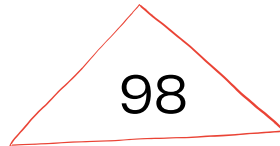
1. Look at these three numbers.



(a) Which is the greatest? _____

(b) Which is the smallest? _____

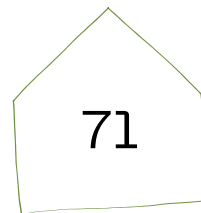
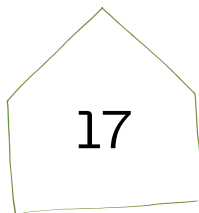

2. Look at these three numbers.



(a) Which is the greatest? _____

(b) Which is the smallest? _____

3. Look at these three numbers.



(a) Which is the greatest? _____

(b) Which is the smallest? _____



Numbers

worksheetspack

Grade 2 Math

Name:

Date:

Comparing numbers

1. Look at these four numbers.

20

45

65

70

(a) Which is the greatest? _____

(b) Which is the smallest? _____

2. Look at these four numbers.

50

30

35

15

(a) Which is the greatest? _____

(b) Which is the smallest? _____

3. Look at these four numbers.

25

95

10

40

(a) Which is the greatest? _____

(b) Which is the smallest? _____