





Name:


Date:


## Even and odd numbers


1. Look at these numbers. Are they even or odd?


(a) 33 


(b) 94 


(c) 108 


(d) 379 

(e) 182 

(f) 405 

(g) 244 

(h) 57 

(i) 651 

2. Tick the even number in each set.

201  
55  
324

156  
153  
151

48  
267  
49

109  
142  
155

3. Tick the odd number in each set.

357  
350  
68

24  
101  
212

56  
57  
158

544  
488  
223





Name:


Date:


## Even and odd numbers


1. Look at these numbers. Are they even or odd?


(a) 106 


(b) 82 


(c) 241 


(d) 357 

(e) 269 

(f) 148 

(g) 204 

(h) 536 

(i) 73 

2. Tick the even number in each set.

300  
505  
447

77  
89  
98

224  
227  
129

35  
352  
353

3. Tick the odd number in each set.

408  
307  
506

114  
118  
115

99  
190  
496

92  
20  
145