



SYMMETRY


Name:

Date:

Symmetry

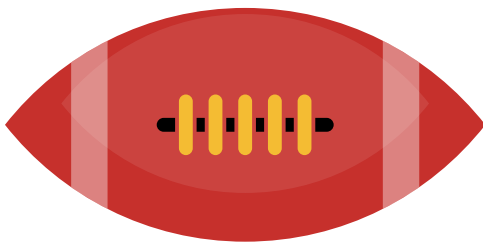
Draw and write the line(s) of symmetry for each object.
















SYMMETRY

Name:

Date:

Symmetry

Draw and write the line(s) of symmetry for each object.

