


Name:

Date:

Shapes

Write down the number of sides and vertices for each shape.


(a)



_____ side(s)

_____ vertice(s)

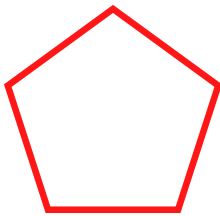
(b)



_____ side(s)

_____ vertice(s)


(c)



_____ side(s)

_____ vertice(s)

(d)



_____ side(s)

_____ vertice(s)

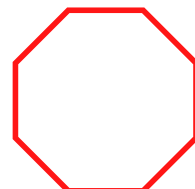
(e)



_____ side(s)

_____ vertice(s)

(f)



_____ side(s)

_____ vertice(s)