



# SYMMETRY

Name:


Date:

## Symmetry

Look at the objects below. Are they symmetrical?  
Write Yes or No in the blanks.



\_\_\_\_\_




\_\_\_\_\_



\_\_\_\_\_



\_\_\_\_\_



\_\_\_\_\_



\_\_\_\_\_



# SYMMETRY

Grade 4 Math

Name:


Date:

## Symmetry


Look at the objects below. Are they symmetrical?  
Write Yes or No in the blanks.




\_\_\_\_\_



\_\_\_\_\_



\_\_\_\_\_



\_\_\_\_\_



\_\_\_\_\_



\_\_\_\_\_



# SYMMETRY

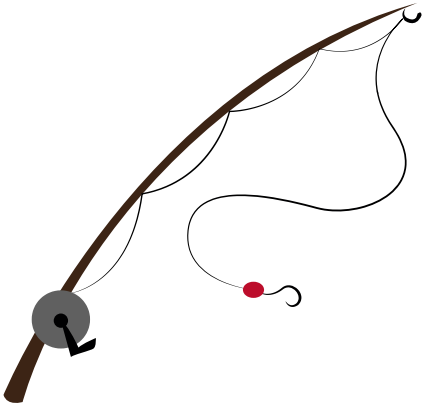
Grade 4 Math

Name:

Date:

## Symmetry

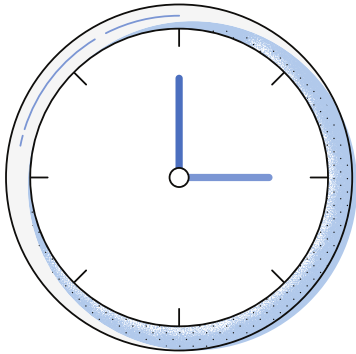
Look at the objects below. Are they symmetrical?  
Write Yes or No in the blanks.



\_\_\_\_\_



\_\_\_\_\_




\_\_\_\_\_



\_\_\_\_\_



\_\_\_\_\_



\_\_\_\_\_



# SYMMETRY

Grade 4 Math

Name:

Date:

## Symmetry

Look at the objects below. Are they symmetrical?  
Write Yes or No in the blanks.



\_\_\_\_\_




\_\_\_\_\_



\_\_\_\_\_



\_\_\_\_\_



\_\_\_\_\_



\_\_\_\_\_